

















































































Name: _____ Datum: _____

Zahlenraum bis 10
Male in der Reihe genau so viele Häuser an wie die Zahl angibt.

Blatt 5

4	         
3	         
8	         
10	         
7	         
2	         
9	         
5	         

Name:

Datum:

Zahlenraum bis 10

Blatt

13

Male die Eichhörnchen aus. Zähle sie und schreibe das Ergebnis auf.



=



=



=



=



=



=



=



=



=



=



=



=



=



=



=

Name:

Datum:

Zahlenraum bis 10

Blatt 25

Schreibe die richtigen Zahlen in die Kästchen.

The crossword puzzle grid contains the following numbers in their respective cells:

- Row 1: (1,2)=3, (1,3)=4, (1,6)=8, (1,8)=5
- Row 2: (2,1)=5, (2,4)=4, (2,5)=2, (2,6)=5, (2,8)=4, (2,9)=6
- Row 3: (3,3)=7, (3,4)=2, (3,5)=1, (3,6)=6, (3,9)=7
- Row 4: (4,1)=5, (4,2)=3, (4,3)=3, (4,4)=4, (4,5)=5, (4,6)=7, (4,8)=2, (4,9)=6
- Row 5: (5,1)=8, (5,2)=9, (5,3)=3, (5,4)=2, (5,5)=7, (5,6)=4, (5,7)=2, (5,8)=9, (5,9)=7
- Row 6: (6,1)=4, (6,2)=3, (6,3)=2, (6,4)=7, (6,5)=4, (6,6)=1, (6,7)=2, (6,8)=5
- Row 7: (7,1)=2, (7,2)=3, (7,3)=2, (7,4)=5, (7,5)=4, (7,6)=7, (7,7)=8, (7,8)=8, (7,9)=6
- Row 8: (8,1)=4, (8,2)=3, (8,3)=4, (8,4)=3, (8,5)=1, (8,6)=7, (8,7)=8, (8,8)=2, (8,9)=5
- Row 9: (9,1)=7, (9,2)=8, (9,3)=5, (9,4)=4, (9,5)=3, (9,6)=2, (9,7)=0, (9,8)=5, (9,9)=3
- Row 10: (10,1)=6, (10,2)=1, (10,3)=3, (10,4)=8, (10,5)=7, (10,6)=3, (10,7)=8, (10,8)=3
- Row 11: (11,3)=2, (11,4)=1, (11,5)=6, (11,6)=5, (11,7)=4, (11,8)=6, (11,9)=6

Name:

Datum:

Zahlenraum bis 10

Blatt 42

Schreibe die Aufgaben auf und rechne sie aus.

🌲 + 🌲🌲 = 2 + 3 = 5

🌲🌲🌲 + 🌲🌲🌲🌲🌲🌲 = + =

🌲🌲🌲 + 🌲🌲🌲🌲🌲 = + =

🌲 + 🌲🌲🌲🌲🌲🌲🌲🌲 = + =

🌲🌲🌲🌲 + 🌲🌲🌲🌲🌲🌲 = + =

🌲 + 🌲🌲🌲🌲🌲🌲 = + =

🌲🌲🌲🌲🌲🌲🌲 + 🌲🌲 = + =

🌲🌲🌲🌲🌲 + 🌲🌲 = + =

🌲🌲 + 🌲🌲🌲🌲🌲 = + =

🌲🌲🌲🌲🌲🌲 + 🌲 = + =

🌲 + 🌲🌲🌲🌲🌲 = + =

🌲 + 🌲🌲 = + =

🌲🌲🌲🌲 + 🌲🌲🌲🌲🌲 = + =

🌲🌲🌲 + 🌲🌲 = + =

🌲🌲 + 🌲 = + =

🌲🌲🌲🌲 + 🌲🌲🌲🌲 = + =

🌲🌲🌲🌲🌲🌲🌲🌲🌲 + 🌲 = + =

🌲 + 🌲🌲🌲 = + =

🌲🌲🌲 + 🌲🌲🌲 = + =

Name:


Datum:

Zahlenraum bis 10


Blatt 51

Male in einer Reihe so viele Kerzen an wie die beiden Zahlen angeben. Zähle die angemalten Kerzen und schreibe die Zahl in das Kästchen.


$4 + 1 =$




$1 + 2 =$




$3 + 2 =$




$3 + 4 =$




$3 + 7 =$




$6 + 1 =$




$4 + 6 =$




$6 + 3 =$




$2 + 4 =$




$5 + 2 =$




$1 + 5 =$




$4 + 2 =$



$6 + 4 =$



$6 + 2 =$



Name:

Datum:

Zahlenraum bis 10

Blatt 62

Streiche so viele Schwäne ab wie **hinter dem =-Zeichen** stehen.

Zähle die restlichen Schwäne und schreibe die Zahl in das Kästchen.

$9 = 2 + \square$



$10 = 2 + \square$



$7 = 1 + \square$



$8 = 3 + \square$



$9 = 9 + \square$



$7 = 4 + \square$



$9 = 6 + \square$



$10 = 5 + \square$



$2 = 2 + \square$



$9 = 4 + \square$



$10 = 8 + \square$



$5 = 5 + \square$



$6 = 6 + \square$



$3 = 3 + \square$



Name:

Datum:

Zahlenraum bis 10
Zähle das Geld.



Blatt 80

		=	<input type="text"/>	€
		=	<input type="text"/>	€
		=	<input type="text"/>	€
		=	<input type="text"/>	€
		=	<input type="text"/>	€
		=	<input type="text"/>	€
		=	<input type="text"/>	€
		=	<input type="text"/>	€
		=	<input type="text"/>	€
		=	<input type="text"/>	€
		=	<input type="text"/>	€
		=	<input type="text"/>	€
		=	<input type="text"/>	€

Name:

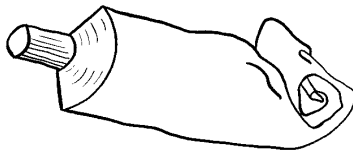
Datum:

Zahlenraum bis 10

Addition bis 10

Blatt 86

$4 + 2 = \square$

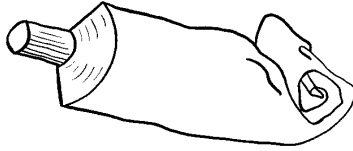


$3 + 1 = \square$

$3 + 6 = \square$

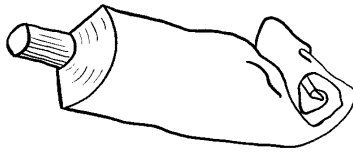
$6 + 0 = \square$

$5 + 4 = \square$



$2 + 3 = \square$

$7 + 3 = \square$

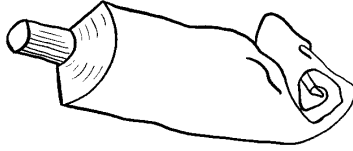


$1 + 0 = \square$

$2 + 7 = \square$

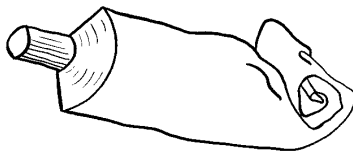
$6 + 1 = \square$

$5 + 3 = \square$



$2 + 5 = \square$

$3 + 4 = \square$

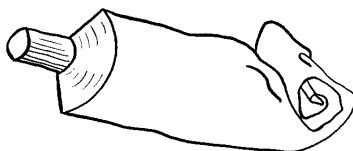


$3 + 3 = \square$

$4 + 3 = \square$

$3 + 5 = \square$

$7 + 0 = \square$

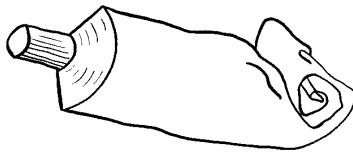


$3 + 7 = \square$

$5 + 0 = \square$

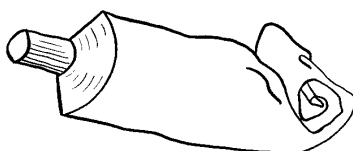
$4 + 6 = \square$

$5 + 5 = \square$



$8 + 0 = \square$

$3 + 2 = \square$

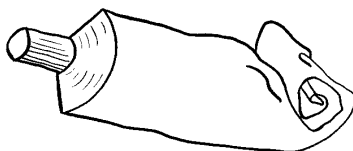


$10 + 0 = \square$

$5 + 1 = \square$

$6 + 4 = \square$

$4 + 1 = \square$

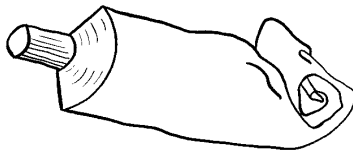


$5 + 2 = \square$

$6 + 2 = \square$

$3 + 0 = \square$

$1 + 7 = \square$



$6 + 3 = \square$