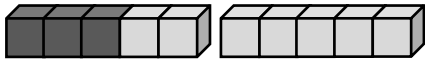
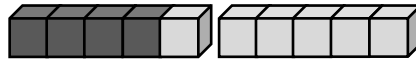


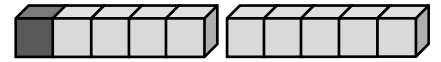
Immer 10.



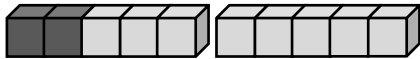
$$\square + \square$$



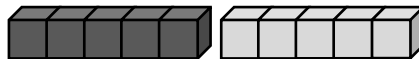
$$\square + \square$$



$$\square + \square$$



$$\square + \square$$



$$\square + \square$$



$$\square + \square$$

10	
5	

10	
8	

10	
6	

10	
3	



1	
9	

10	
4	

10	
7	

10	
2	

1	
7	
8	
9	
6	

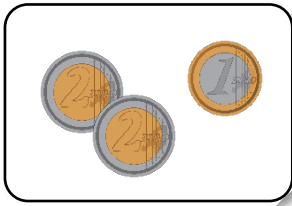
8	
2	
5	
3	
8	

7	
3	
7	
5	
4	

9	
1	
7	
6	
5	



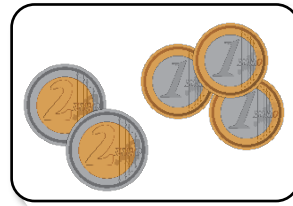
Wie viel Geld ist es zusammen?




Euro



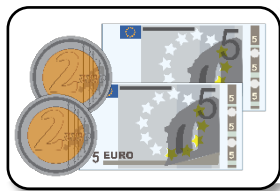
Euro



Euro



Euro




Euro



Euro

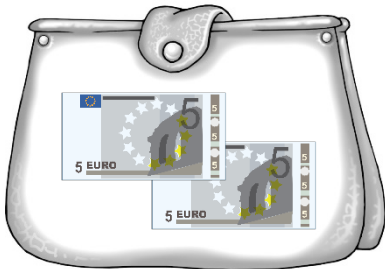


Euro




Euro

Ben hat:

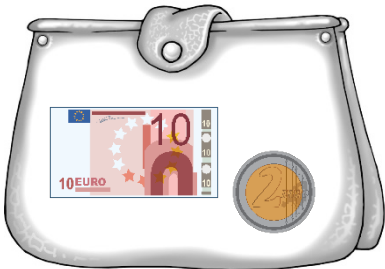


Er kauft:




Ben hat noch Euro übrig.

Lena hat:



Sie kauft:



Lena hat noch Euro übrig.

Thea hat:



Sie kauft:



Thea hat noch Euro übrig.