



$6 + 4 = 10$



$2 + \underline{\quad} = 10$



$\underline{\quad} + \underline{\quad} = 10$



$\underline{\quad} + \underline{\quad} = 10$



$\underline{\quad} + \underline{\quad} = 10$



$\underline{\quad} + \underline{\quad} = 10$



$\underline{\quad} + \underline{\quad} = 10$



$\underline{\quad} + \underline{\quad} = 10$



$\underline{\quad} + \underline{\quad} = 10$



$\underline{\quad} + \underline{\quad} = 10$



$\underline{\quad} + \underline{\quad} = 10$



$\underline{\quad} + \underline{\quad} = 10$



$6 + 4 = 10$



$2 + \underline{\quad} = 10$



$\underline{\quad} + \underline{\quad} = 10$



$\underline{\quad} + \underline{\quad} = 10$



$\underline{\quad} + \underline{\quad} = 10$



$\underline{\quad} + \underline{\quad} = 10$



$\underline{\quad} + \underline{\quad} = 10$



$\underline{\quad} + \underline{\quad} = 10$



$\underline{\quad} + \underline{\quad} = 10$



$\underline{\quad} + \underline{\quad} = 10$

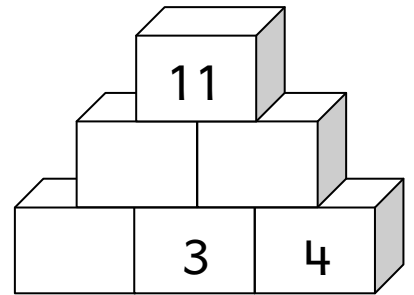
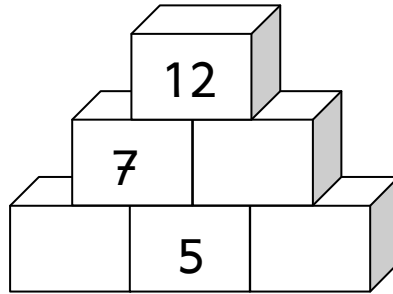
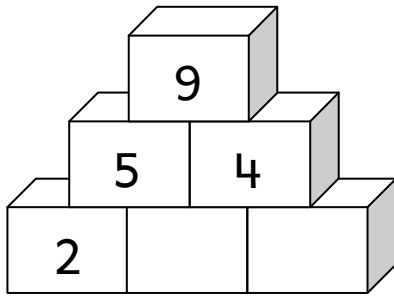
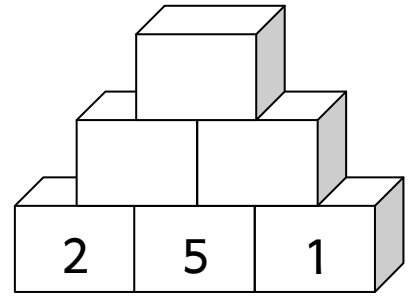
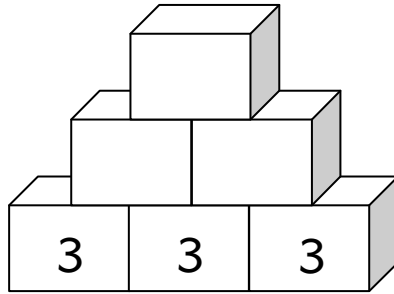
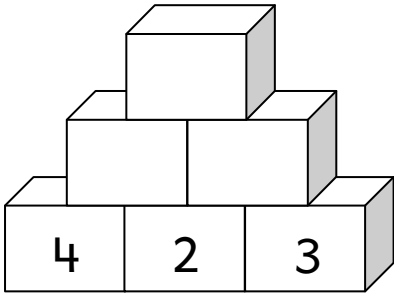


$\underline{\quad} + \underline{\quad} = 10$

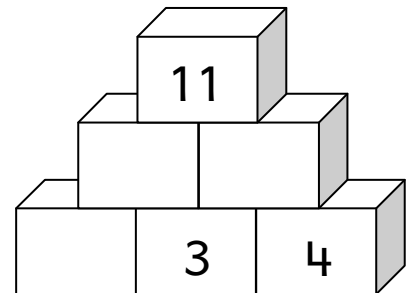
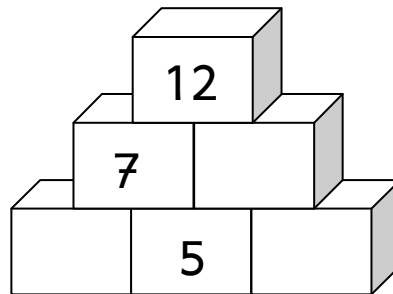
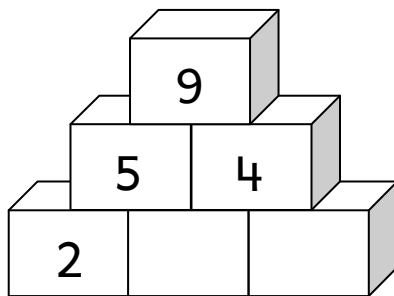
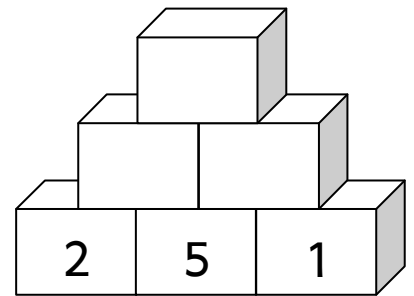
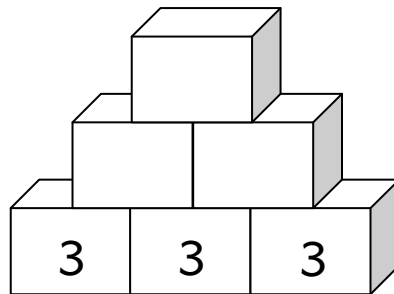
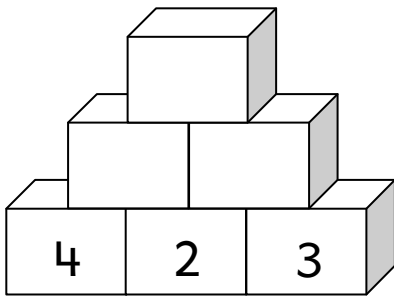


$\underline{\quad} + \underline{\quad} = 10$





© Matobe-Verlag - Valessa Scheufler



© Matobe-Verlag - Valessa Scheufler

Wie viel Geld?



___ Euro



___ Euro



___ Euro



___ Euro



___ Euro



___ Euro



___ Euro



___ Euro



___ Euro

© Matobe-Verlag - Valessa Scheufler

Wie viel Geld?



___ Euro



___ Euro



___ Euro



___ Euro



___ Euro



___ Euro



___ Euro



___ Euro



___ Euro

© Matobe-Verlag - Valessa Scheufler

+	3	4
2		
3		

+	1	3
2		
1		

+	5	6
1		
4		

+	2	7
6		
4		

+	5	6
4		
3		

+	8	1
7		
6		

+	5	6
7		
8		

+	9	6
4		
5		



© Matobe-Verlag - Valessa Scheufler

+	3	4
2		
3		

+	1	3
2		
1		

+	5	6
1		
4		

+	2	7
6		
4		

+	5	6
4		
3		

+	8	1
7		
6		

+	5	6
7		
8		

+	9	6
4		
5		



© Matobe-Verlag - Valessa Scheufler